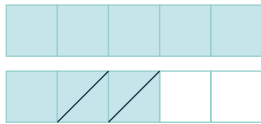


YO APRENDER

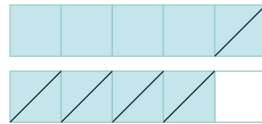
EJE CÁLCULOS - FICHA 2

Para resolver los problemas de estas fichas podés utilizar el material recortable del «Yo amo aprender».

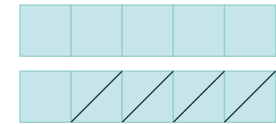
1. Escribí el cálculo correspondiente.




$$8 - 2 = 6$$




$$\underline{\quad} - \underline{\quad} = \underline{\quad}$$




$$\underline{\quad} - \underline{\quad} = \underline{\quad}$$



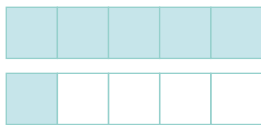
$$\underline{\quad} - 3 = \underline{\quad}$$




$$\underline{\quad} - 5 = \underline{\quad}$$




$$\underline{\quad} - 4 = \underline{\quad}$$



$$6 - \underline{\quad} = 3$$



$$8 - \underline{\quad} = 4$$




$$9 - \underline{\quad} = 2$$


2. Representá y resolvé.



$$5 - 3 =$$



$$6 - 2 =$$



$$7 - 4 =$$

3. Escribí el número que falta.

$$7 - \underline{\quad} = 3$$

$$\underline{\quad} - 3 = 5$$

$$8 - \underline{\quad} = 5$$

$$10 - \underline{\quad} = 5$$